

Name \_\_\_\_\_

Date \_\_\_\_\_



# TELLING THE TIME - QUARTER TO SHEET 1

Write the correct time underneath each clock. The first one has been done for you.

Quarter to 4	Quarter to ____	Quarter to ____
Quarter to ____	Quarter to ____	Quarter to ____
Quarter to ____	Quarter to ____	Quarter to ____

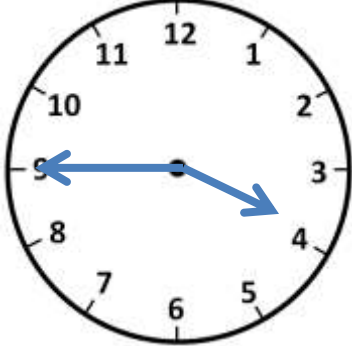
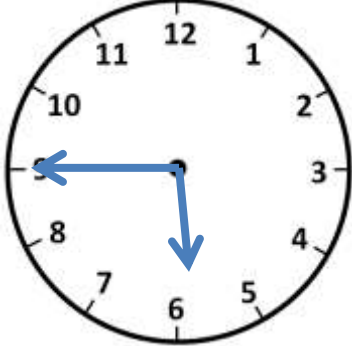
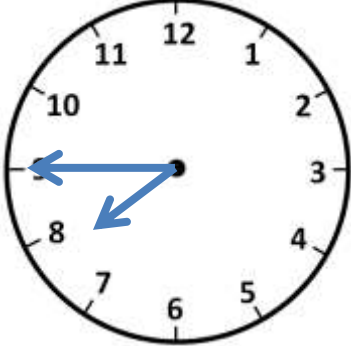
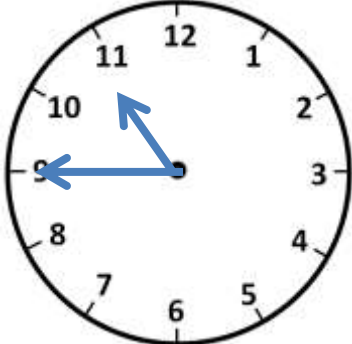

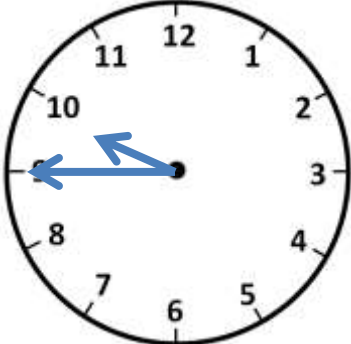
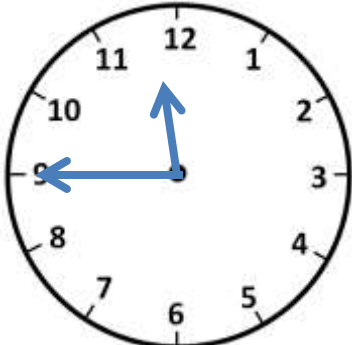
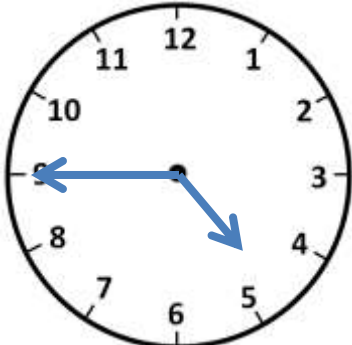
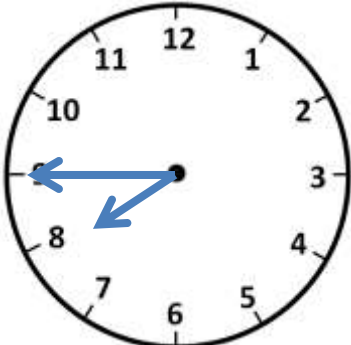


Name

Date



# TELLING THE TIME - QUARTER TO SHEET 1 ANSWERS

		
Quarter to <u>4</u>	Quarter to <u>6</u>	Quarter to <u>8</u>
		
Quarter to <u>11</u>	Quarter to <u>2</u>	Quarter to <u>10</u>
		
Quarter to <u>12</u>	Quarter to <u>5</u>	Quarter to <u>8</u>

